

**SSC
GD**

**Previous Year Paper
16 Nov 2021 Shift 1**

Exam Date	16/11/2021
Exam Time :	9:00 AM - 10:30 AM
Subject	Constable GD 2021

Section : Part A General Intelligence and Reasoning

Q.1 Five friends, P, Q, R, S and T are sitting in a row facing south. Q is sitting in the centre position. P is sitting at the west end. T and R are sitting on one side of Q. Two persons are sitting between P and R. Who is sitting between Q and P?

- Ans
- 1. Q
 - 2. T
 - 3. S
 - 4. R

Question ID : 65497828355
Status : Answered
Chosen Option : 3

Q.2 Select the option that is related to the third term in the same way as the second term is related to the first term.

Bhubaneswar : Odisha :: Aizawl : ?

- Ans
- 1. Mizoram
 - 2. Meghalaya
 - 3. Manipur
 - 4. Tripura

Question ID : 65497828354
Status : Answered
Chosen Option : 1

Q.3 Select the number from among the given options that can replace the question mark (?) in the following series.

19, 23, 32, 48, 73, ?

- Ans
- 1. 109
 - 2. 108
 - 3. 111
 - 4. 103

Question ID : 65497828351
Status : Answered
Chosen Option : 1

Q.4 Study the given pattern carefully and select the number that can replace the question mark (?) in it.

13 26 39
30 42 ?
17 16 15

- Ans 1. 40
 2. 45
 3. 54
 4. 60

Question ID : 65497828341

Status : Not Attempted and
Marked For Review

Chosen Option : --

Q.5 In a certain code language, 'ARROW' is written as 'FOOSE' and 'GERM' is written as 'THOR'. How will 'MOWER' be written in that language?

- Ans 1. SHORE
 2. ROSHE
 3. RSEHO
 4. HORSE

Question ID : 65497828339

Status : Answered

Chosen Option : 3

Q.6 Select the combination of letters that when sequentially placed in the blanks of the given series will complete the series.

C 2 _ X 2 C C _ X X 2 _ C 2 _ X _ C

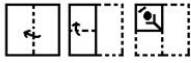
- Ans 1. C2X2X
 2. X2CX2
 3. AXX2C
 4. XCX2C

Question ID : 65497828350

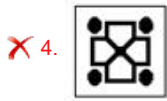
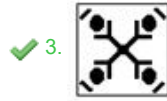
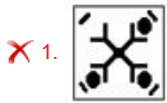
Status : Answered

Chosen Option : 2

Q.7 The sequence of folding a piece of paper and the manner in which the folded paper has been cut is shown in the following figures. How would this paper look when unfolded?



Ans



Question ID : 65497828343

Status : Answered

Chosen Option : 3

Q.8 Select the letter-cluster from among the given options that can replace the question mark (?) in the following series.

SKH, PMG, MOF, JQE, ?

Ans ✓ 1. GSD

✗ 2. SDF

✗ 3. GTD

✗ 4. HSD

Question ID : 65497828353

Status : Answered

Chosen Option : 1

Q.9 Four letter-clusters have been given, out of which three are alike in some manner and one is different. Select the letter-cluster that is different.

Ans ✗ 1. HIJ

✗ 2. QRS

✗ 3. DEF

✓ 4. NMP

Question ID : 65497828357

Status : Answered

Chosen Option : 4

Q.10 Eight friends, A, B, C, D, E, F, G and H, are sitting in a straight line, all facing the north. F is sitting between D and G. B is sitting between H and A. E is third to the left of G. G is sitting at one of the corners. H is third to the left of C. Who is sitting between A and E?

- Ans
- 1. B
 - 2. H
 - 3. D
 - 4. C

Question ID : 65497828344
Status : Answered
Chosen Option : 4

Q.11 Two different positions of the same dice marked with the letters/symbols X, S, Y, &, Z and @ are shown. Select the letter/symbol that will be on the face opposite to the face having the symbol S.



- Ans
- 1. &
 - 2. Z
 - 3. @
 - 4. X

Question ID : 65497828347
Status : Answered
Chosen Option : 1

Q.12 In a certain code language, 'India is my country' means '8573', 'Sam is my friend' means '8634', 'My country' means '73' and 'Team India' means '59'. What number is the code for 'Country'?

- Ans
- 1. 5
 - 2. 7
 - 3. 8
 - 4. 3

Question ID : 65497828358
Status : Answered
Chosen Option : 2

Q.13 'R+S' means 'R is the daughter of S'. 'R-S' means 'R is the husband of S'. 'R x S' means 'R is the brother of S'. If 'T x V + Z', then which of the following options is true?

- Ans
- 1. T is the uncle of Z.
 - 2. T is the father of Z.
 - 3. T is the son of Z.
 - 4. T is the brother of Z.

Question ID : 65497828363
Status : Answered
Chosen Option : 3

Q.14 Select the correct option that indicates the arrangement of the given words in the order in which they appear in an English dictionary.

1. Prestige
2. Pristine
3. Prescribe
4. Prepaid
5. Premium

- Ans
- 1. 4, 5, 3, 2, 1
 - 2. 5, 3, 4, 1, 2
 - 3. 5, 4, 3, 1, 2
 - 4. 4, 5, 3, 1, 2

Question ID : 65497828349
Status : Answered
Chosen Option : 3

Q.15 Select the option that is related to the third term in the same way as the second term is related to the first term.

BLOCK : LBPKC :: MARGIN : ?

- Ans
- 1. OHQHBL
 - 2. OHBHQL
 - 3. OBHQHL
 - 4. OHHQBL

Question ID : 65497828361
Status : Answered
Chosen Option : 4

Q.16 Select the option in which the given figure is embedded (rotation is NOT allowed).



Ans

- 1.
- 2.
- 3.
- 4.

Question ID : 65497828348
Status : Answered
Chosen Option : 1

Q.17 Select the number from among the given options that can replace the question mark (?) in the following series.

24, 40, 64, 104, ?, 312

Ans 1. 228

2. 176

3. 154

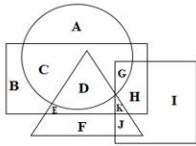
4. 168

Question ID : 65497828359

Status : Answered

Chosen Option : 2

Q.18 In the following Venn diagram, the circle represents 'vegetables', the triangle represents 'roots', the square represents 'hard soil', and the rectangle represents 'summer'. Which of the following letters represents root vegetables that grow in summer but NOT in hard soil?



Ans 1. D

2. K

3. E

4. G

Question ID : 65497828356

Status : Answered

Chosen Option : 1

Q.19 Select the option that is related to the third number in the same way as the second number is related to the first number.

31 : 90 :: 43 : ?

Ans 1. 130

2. 125

3. 102

4. 75

Question ID : 65497828345

Status : Not Attempted and Marked For Review

Chosen Option : --

Q.20 Read the given statements and conclusions carefully. Assuming that the information given in the statements is true, even if it appears to be at variance with commonly known facts, decide which of the given conclusions logically follow(s) from the statements.

Statements:

All blues are whites.
Some whites are greys.

Conclusions:

I. All greys are whites.
II. All greys are blues.

- Ans** 1. Neither conclusion I nor conclusion II follows
 2. Only conclusion I follows
 3. Only conclusion II follows
 4. Both the conclusions follow

Question ID : 65497828340

Status : Answered

Chosen Option : 1

Q.21 When a number is added to its multiple of 5 and its square, the sum of these three numbers is 91. Find the number.

- Ans** 1. 9
 2. 11
 3. 7
 4. 6

Question ID : 65497828342

Status : Not Attempted and Marked For Review

Chosen Option : --

Q.22 In a certain code language, 'CIRCLE' is written as 'DLWAHY'. How will 'SQUARE' be written in that language?

- Ans** 1. TTPNKY
 2. TNZYVY
 3. TTZYNY
 4. TNPYVY

Question ID : 65497828362

Status : Answered

Chosen Option : 3

Q.23 In an imaginary mathematical system, symbol '-' stands for addition, symbol '+' stands for division, symbol 'x' stands for subtraction, and symbol '÷' stands for multiplication. All other rules of mathematics are the same as in the existing system. What is the value of the following expression?

$$240 \times 72 + 8 \div 24 - 6$$

- Ans** 1. 30
 2. 36
 3. 26
 4. 19

Question ID : 65497828346

Status : Answered

Chosen Option : 1

Q.24 Select the correct mirror image of the given combination when the mirror is placed at 'PQ' as shown.



- Ans
- 1. M8VGIJCVF
 - 2. JAQZGIA8M
 - 3. M8VIGJCVF
 - 4. JAQZGIA8M

Question ID : 65497828360
 Status : Answered
 Chosen Option : 4

Q.25 Select the figure from among the given options that can replace the question mark (?) in the following series.



- Ans
- 1.
 - 2.
 - 3.
 - 4.

Question ID : 65497828352
 Status : Answered
 Chosen Option : 3

Q.1 Which of the following Articles of the Constitution of India is related to the promotion of co-operative societies?

- Ans 1. 43A
 2. 43B
 3. 31A
 4. 31B

Question ID : 65497828376
Status : Answered
Chosen Option : 2

Q.2 Which of the following nations was India's top trading partner in the financial year 2019-20?

- Ans 1. China
 2. The US
 3. Mauritius
 4. Japan

Question ID : 65497828365
Status : Not Answered
Chosen Option : --

Q.3 After the death of Guru Gobind Singh in 1708, the Khalsa revolted against the Mughal authority under the leadership of _____.

- Ans 1. Guru Angad
 2. Guru Amar Das
 3. Banda Bahadur
 4. Guru Nanak Dev

Question ID : 65497828385
Status : Not Attempted and Marked For Review
Chosen Option : --

Q.4 Who among the following founded the newspaper 'Sambad Kaumudi'?

- Ans 1. Rash Bihari Bose
 2. Raja Ram Mohan Roy
 3. Shishir Kumar Ghosh
 4. Ishwar Chandra Vidyasagar

Question ID : 65497828366
Status : Not Answered
Chosen Option : --

Q.5 Which of the following set of countries participated in the Malabar Naval Exercise 2020?

- Ans 1. India, Japan and the US
 2. India, Israel and the US
 3. India, Australia, Israel and the US
 4. India, Australia, Japan and the US

Question ID : 65497828375
Status : Not Answered
Chosen Option : --

Q.6 Sarayu river is a tributary of which river?

- Ans 1. Pindar
 2. Bhagirathi
 3. Tons
 4. Sharda

Question ID : 65497828364
Status : Not Answered
Chosen Option : --

Q.7 On 26 January 2019, the Constitution of India completed 69 years of its existence. In these years, it was amended _____ times (as on 12 January 2019).

- Ans 1. 100
 2. 103
 3. 109
 4. 106

Question ID : 65497828386
Status : Answered
Chosen Option : 2

Q.8 Which year marks the beginning of phase 2 of the Swachh Bharat Mission (Grameen)?

- Ans 1. 2020-21
 2. 2019-20
 3. 2018-19
 4. 2021-22

Question ID : 65497828388
Status : Answered
Chosen Option : 2

Q.9 Who among the following represents India in archery?

- Ans 1. Deepika Kumari
 2. Soumyajit Ghosh
 3. Neeraj Chopra
 4. Manika Batra

Question ID : 65497828367
Status : Answered
Chosen Option : 1

Q.10 _____ represents the high point of an eclectic art, which, in the 7th and 8th centuries under the Chalukya dynasty, achieved a harmonious blend of architectural forms from northern and southern India.

- Ans 1. Kochi
 2. Pattadakal
 3. Konark
 4. Bhimbetka

Question ID : 65497828368
Status : Not Answered
Chosen Option : --

Q.11 _____ is known as viticulture.

- Ans
- 1. growing vegetables, flowers and fruits
 - 2. cultivation of grapes
 - 3. breeding of fish
 - 4. rearing of silkworms

Question ID : 65497828382
Status : Not Answered
Chosen Option : --

Q.12 Who among the following is best known for his plays 'Yayati' and 'Tughlaq'?

- Ans
- 1. Viju Khote
 - 2. Shreeram Lagoo
 - 3. Girish Karnad
 - 4. Mohammed Zahur Khayyam

Question ID : 65497828371
Status : Not Answered
Chosen Option : --

Q.13 Faqir Chand Kohli, who passed away in November 2020, was known as the '_____'.

- Ans
- 1. Father of Indian Civil Services
 - 2. Father of Indian Space Programme
 - 3. Father of Indian Prehistory
 - 4. Father of Indian Software (IT) Industry

Question ID : 65497828380
Status : Not Answered
Chosen Option : --

Q.14 In a molecule of water, the ratio of the mass of hydrogen to that of oxygen is:

- Ans
- 1. 1 : 8
 - 2. 1 : 4
 - 3. 1 : 2
 - 4. 1 : 16

Question ID : 65497828370
Status : Marked For Review
Chosen Option : 4

Q.15 Union Minister of Education launched a free mobile app called _____, on 5 September 2020.

- Ans
- 1. EnglishPro
 - 2. Beelinguapp
 - 3. Duolingo
 - 4. Hello Talk

Question ID : 65497828387
Status : Not Answered
Chosen Option : --

Q.16 α particles are doubly charged ions of _____.

- Ans
- 1. lithium
 - 2. beryllium
 - 3. helium
 - 4. hydrogen

Question ID : 65497828369
Status : Not Answered
Chosen Option : --

Q.17 Which of the following institutions started the 'Team Halo' initiative in November 2020?

- Ans
- 1. World Bank
 - 2. United Nations
 - 3. World Health Organization
 - 4. World Trade Organization

Question ID : 65497828377
Status : Not Answered
Chosen Option : --

Q.18 With which of the following sports would you associate the team 'Kerala Blasters'?

- Ans
- 1. Football
 - 2. Badminton
 - 3. Kabaddi
 - 4. Cricket

Question ID : 65497828383
Status : Marked For Review
Chosen Option : 3

Q.19 Which of the following is the traditional bamboo dance of the Mizos?

- Ans
- 1. Moyashai
 - 2. Udoho
 - 3. Cheraw
 - 4. Aaluyattu

Question ID : 65497828378
Status : Not Answered
Chosen Option : --

Q.20 The Third Battle of Panipat between the Marathas and Ahmad Shah Durrani , the ruler of Afghanistan was fought in the year:

- Ans
- 1. 1781
 - 2. 1851
 - 3. 1761
 - 4. 1831

Question ID : 65497828374
Status : Not Answered
Chosen Option : --

Q.21 In November 2020, the Board of Control for Cricket in India (BCCI) announced _____ as Team India's kit sponsor till 2023.

- Ans
- 1. Byju's
 - 2. Nike
 - 3. MPL Sports
 - 4. Oppo

Question ID : 65497828381
Status : Answered
Chosen Option : 3

Q.22 Raja Todar Mal was the Revenue Minister during the reign of which of the following Mughal emperors?

- Ans
- 1. Humayun
 - 2. Shah Jahan
 - 3. Jahangir
 - 4. Akbar

Question ID : 65497828384
Status : Answered
Chosen Option : 4

Q.23 As per calculations done in 2011-2012, the poverty line for a person of rural India got fixed at _____ per month.

- Ans
- 1. ₹816
 - 2. ₹752
 - 3. ₹1,000
 - 4. ₹687

Question ID : 65497828372
Status : Not Answered
Chosen Option : --

Q.24 Five rivers from Punjab (India) enter the river _____ at Mithankot in Pakistan.

- Ans
- 1. Indus
 - 2. Yamuna
 - 3. Ganga
 - 4. Brahmaputra

Question ID : 65497828379
Status : Answered
Chosen Option : 1

Q.25 _____ is a simple device that is used to either break the electric circuit, or to complete it.

- Ans
- 1. Transistor
 - 2. Switch
 - 3. Capacitor
 - 4. Resistor

Question ID : 65497828373
Status : Answered
Chosen Option : 2

Q.1 The perimeter of an equilateral triangle is $36\sqrt{3}$ cm. Find its height.

- Ans
- 1. 18 cm
 - 2. 9 cm
 - 3. 10 cm
 - 4. 6 cm

Question ID : 65497828400
Status : Answered
Chosen Option : 1

Q.2 A person crosses a 1600 m long street in 4 min. What is his speed (in km/h)?

- Ans
- 1. 22
 - 2. 14
 - 3. 20
 - 4. 24

Question ID : 65497828398
Status : Answered
Chosen Option : 4

Q.3 A chair is sold for ₹720 after giving a discount of 10% on its marked price. The cost price of the chair is ₹640. If it is sold at the marked price, then the profit percentage will be:

- Ans
- 1. 30%
 - 2. 20%
 - 3. 18%
 - 4. 25%

Question ID : 65497828407
Status : Answered
Chosen Option : 4

Q.4 What is 12% of 4% of 7% of 2×10^6 ?

- Ans
- 1. 386
 - 2. 583
 - 3. 672
 - 4. 121

Question ID : 65497828403
Status : Answered
Chosen Option : 3

Q.5 A solid metallic rectangular block of dimensions $112 \text{ cm} \times 44 \text{ cm} \times 25 \text{ cm}$ is melted and recast into a cylinder of radius 35 cm. The curved surface area (in cm^2) of the cylinder is: (Take $\pi = \frac{22}{7}$)

- Ans
- 1. 7260
 - 2. 6600
 - 3. 7040
 - 4. 6160

Question ID : 65497828413

Status : **Not Attempted and Marked For Review**

Chosen Option : --

Q.6 Find the value of $45 - 3 \times (4 \text{ of } 6 + 12 \div 3 \times 6 - 4 \times 5) + 6$.

- Ans
- 1. -45
 - 2. -135
 - 3. -33
 - 4. -30

Question ID : 65497828408

Status : **Answered**

Chosen Option : 3

Q.7 By selling 36 m of jute, a shopkeeper gains an amount equal to the selling price of 12 m of jute. Find the gain percentage.

- Ans
- 1. 50%
 - 2. 40%
 - 3. 45%
 - 4. 55%

Question ID : 65497828409

Status : **Answered**

Chosen Option : 1

Q.8 Divide ₹2,760 in to two parts such that when these are invested for 2 and 4 years, respectively, at the rate of 5 % per annum simple interest, the amounts received are equal. What is the second part (in ₹) invested?

- Ans
- 1. 1,100
 - 2. 1,500
 - 3. 1,320
 - 4. 1,440

Question ID : 65497828396

Status : **Not Attempted and Marked For Review**

Chosen Option : --

Q.9 A 725 m long train passes a tunnel 235 m long in 48 seconds. Find the speed of the train.

- Ans**
- 1. 42 km/h
 - 2. 72 km/h
 - 3. 36 km/h
 - 4. 100 km/h

Question ID : 65497828405
Status : Answered
Chosen Option : 2

Q.10 A batsman scored 124 runs, which included 6 boundaries and 10 sixes. What percentage of his total score did he make by running between the wickets?

- Ans**
- 1. $28\frac{19}{31}\%$
 - 2. $24\frac{1}{31}\%$
 - 3. $32\frac{8}{31}\%$
 - 4. $35\frac{3}{31}\%$

Question ID : 65497828390
Status : Answered
Chosen Option : 3

Q.11 The salaries of Ravi and Sumit are in the ratio 4 : 5. If the salary of each is increased by ₹6,000 the new ratio becomes 35 : 40. What will be Sumit's increased salary?

- Ans**
- 1. ₹26,000
 - 2. ₹36,000
 - 3. ₹16,000
 - 4. ₹1,60,000

Question ID : 65497828399
Status : Answered
Chosen Option : 3

Q.12 Anu is four times as good as Binni in completing a task. Together they finish the same task in 7 hours. In how many hours will Anu alone complete the task?

- Ans**
- 1. 22
 - 2. $35/4$
 - 3. $31/4$
 - 4. 24

Question ID : 65497828404
Status : Answered
Chosen Option : 2

Q.13 The number of students in class IX and class X is 42 and 45, respectively. The ratio of the number of boys to girls in classes IX and X is 9 : 5 and 8 : 7, respectively. What is the difference between the total number of boys and the total number of girls in both the classes taken together?

- Ans**
- 1. 11
 - 2. 12
 - 3. 17
 - 4. 15

Question ID : **65497828411**
Status : **Answered**
Chosen Option : **4**

Q.14 P, Q and R can complete a work in 10 days, 20 days and 30 days, respectively, working alone. How soon can the work be completed if P is assisted by Q and R on alternate days?

- Ans**
- 1. $7\frac{1}{17}$ days
 - 2. 9 days
 - 3. 5 days
 - 4. $6\frac{1}{2}$ days

Question ID : **65497828410**
Status : **Not Answered**
Chosen Option : --

Q.15 A loss of $10\frac{1}{2}\%$ gets converted into a profit of $11\frac{3}{5}\%$ when the selling price is increased by ₹132.60. The cost price (in ₹) of the article is:

- Ans**
- 1. 750
 - 2. 800
 - 3. 600
 - 4. 500

Question ID : **65497828391**
Status : **Answered**
Chosen Option : **3**

Q.16 The greatest number that will divide 398, 437 and 5425 leaving 7, 12 and 2 as remainders, respectively, is:

- Ans**
- 1. 11
 - 2. 15
 - 3. 17
 - 4. 19

Question ID : **65497828393**
Status : **Answered**
Chosen Option : **3**

Q.17 If the average of two numbers is 13 and the square root of their product is 12, then the difference between the numbers is:

- Ans**
- 1. 10
 - 2. 18
 - 3. 8
 - 4. 12

Question ID : **65497828394**
Status : **Answered**
Chosen Option : **1**

Q.18 The average of 10 observations is 46. It was realised later that an observation was misread as 42 in place of 142. The correct average is:

- Ans**
- 1. 52
 - 2. 46
 - 3. 58
 - 4. 56

Question ID : **65497828401**
Status : **Answered**
Chosen Option : **4**

Q.19 The ratio of A's and B's salary is 6 : 7. If B's salary is increased by $5\frac{1}{2}\%$, then his total salary becomes ₹1,47,700. The salary (in ₹) of A is:

- Ans**
- 1. 1,10,000
 - 2. 1,20,000
 - 3. 1,40,000
 - 4. 1,35,000

Question ID : **65497828395**
Status : **Answered**
Chosen Option : **2**

Q.20 The certain sum amounts to ₹9,982.50 in $2\frac{1}{2}$ years at 12% p.a., interest compounded 10-monthly. The sum (in ₹) is:

- Ans**
- 1. 8,500
 - 2. 7,800
 - 3. 8,000
 - 4. 7,500

Question ID : **65497828412**
Status : **Not Attempted and Marked For Review**
Chosen Option : **--**

Q.21 A nine-digit number $89563x87y$ is divisible by 72. What is the value of $\sqrt{7x - 3y}$?

- Ans
- 1. 8
 - 2. 5
 - 3. 6
 - 4. 4

Question ID : 65497828389
Status : Answered
Chosen Option : 3

Q.22 The value of $3 \times 7 + 5 - 6 \div 3 - 9 + 45 \div 5 \times 4 - 45$ is:

- Ans
- 1. 9
 - 2. 6
 - 3. 7
 - 4. 36

Question ID : 65497828397
Status : Answered
Chosen Option : 2

Q.23 A TV was available for ₹14,500. The price came down to ₹11,890 during the Diwali sale. What is the percentage discount?

- Ans
- 1. 19.56%
 - 2. 19%
 - 3. 18%
 - 4. 17.6%

Question ID : 65497828402
Status : Answered
Chosen Option : 3

Q.24 A shopkeeper sold an article at a gain of 20%. Had he bought it for 20% less than the original cost and sold it for ₹10 less, he would have gained 25%. Then the Cost Price of the article is:

- Ans
- 1. ₹50
 - 2. ₹40
 - 3. ₹60
 - 4. ₹45

Question ID : 65497828406
Status : Answered
Chosen Option : 1

Q.25 A certain sum amounts to ₹13200 after 4 years and to ₹16400 after 8 years at the same rate per cent p.a. at simple interest. The simple interest (in ₹) on the same sum at 10% p.a. for $3\frac{1}{5}$ years will be:

- Ans
- 1. 4000
 - 2. 3200
 - 3. 2500
 - 4. 3500

Question ID : 65497828392
Status : Answered
Chosen Option : 2

Section : Part D English

Q.1 Select the most appropriate synonym of the given word.

Visible

- Ans
- 1. Secret
 - 2. Apparent
 - 3. Vague
 - 4. Hidden

Question ID : 65497828415
Status : Marked For Review
Chosen Option : 2

Q.2 Select the most appropriate option that can substitute the underlined word in the given sentence.

Microwave ovens heat food quickly, anxiously and safely, but do not brown or bake food in the way that conventional ovens do.

- Ans
- 1. angrily
 - 2. efficiently
 - 3. beautifully
 - 4. accidentally

Question ID : 65497828416
Status : Answered
Chosen Option : 2

Q.3 Select the most appropriate option to fill in the blank.

A _____ mind rarely meets a dead end; it continues the search for the answers.

- Ans
- 1. peculiar
 - 2. weird
 - 3. curious
 - 4. strange

Question ID : 65497828419
Status : Answered
Chosen Option : 3

Q.4 The following sentence has been divided into parts. One of them may contain an error. Select the part that contains the error from the given options. If you don't find any error, mark 'No error' as your answer.

She left / hers umbrella / at the office.

- Ans 1. No error
 2. hers umbrella
 3. She left
 4. at the office

Question ID : 65497828414
Status : Answered
Chosen Option : 2

Q.5 Select the option that can be used as a one-word substitute for the given group of words.

A person who knows everything

- Ans 1. Naive
 2. Omniscient
 3. Intelligent
 4. Omnipresent

Question ID : 65497828420
Status : Answered
Chosen Option : 3

Q.6 The following sentence has been split into four segments. Identify the segment that contains a grammatical error.

Mohan told to / Sagar that he / was looking / very pale.

- Ans 1. very pale
 2. Sagar that he
 3. Mohan told to
 4. was looking

Question ID : 65497828422
Status : Answered
Chosen Option : 3

Q.7 Select the most appropriate option that can substitute the underlined segment in the given sentence. If there is no need to substitute it, select 'No substitution required'.

I'm sure he will grab the chance to earn some extra money.

- Ans 1. No substitution required
 2. of earns
 3. to earned
 4. to earns

Question ID : 65497828429
Status : Answered
Chosen Option : 1

Q.8 Select the option that can be used as a one-word substitute for the given group of words.

One who examines a company's financial records

- Ans
- 1. Conductor
 - 2. Author
 - 3. Auditor
 - 4. Instructor

Question ID : 65497828424
Status : Answered
Chosen Option : 3

Q.9 Select the most appropriate option to fill in the blank.

The doctor _____ her to stop eating fried food.

- Ans
- 1. advised
 - 2. considered
 - 3. arranged
 - 4. expressed

Question ID : 65497828421
Status : Answered
Chosen Option : 1

Q.10 Select the most appropriate option that can substitute the underlined segment in the given sentence. If there is no need to substitute it, select 'No substitution required'.

You need to get the cholesterol from out of your system.

- Ans
- 1. out of your system
 - 2. No substitution required
 - 3. out your system
 - 4. from out off your system

Question ID : 65497828430
Status : Answered
Chosen Option : 1

Q.11 Select the most appropriate option to fill in the blank.

A dialogue is a _____ between two or more people.

- Ans
- 1. conversation
 - 2. commission
 - 3. convertible
 - 4. conversion

Question ID : 65497828427
Status : Answered
Chosen Option : 1

Q.12 Select the most appropriate meaning of the given idiom.

Play for time

- Ans 1. To do something in the stipulated time
 2. To make excuses or do things to gain time
 3. To play something for the sake of old times
 4. To play music in the time provided

Question ID : 65497828428

Status : Not Attempted and
Marked For Review

Chosen Option : --

Q.13 Select the INCORRECTLY spelt word.

- Ans 1. Aniversary
 2. Felicitate
 3. Congratulations
 4. Response

Question ID : 65497828418

Status : Answered

Chosen Option : 1

Q.14 Select the most appropriate meaning of the given idiom.

To breathe one's last

- Ans 1. To take a major decision
 2. To give final verdict
 3. To make a plot
 4. To die

Question ID : 65497828417

Status : Answered

Chosen Option : 4

Q.15 Select the INCORRECTLY spelt word.

- Ans 1. Delivery
 2. Stationary
 3. Dictionary
 4. Voluntary

Question ID : 65497828425

Status : Answered

Chosen Option : 3

Q.16 The following sentence has been split into four segments. Identify the segment that contains a grammatical error.

Neither the manager / nor the employees was / aware of the / shortage of raw materials.

- Ans
- 1. Neither the manager
 - 2. shortage of raw materials
 - 3. nor the employees was
 - 4. aware of the

Question ID : 65497828431
Status : Answered
Chosen Option : 3

Q.17 Select the option that can be used as a one-word substitute for the given group of words.

Anything that leads to death

- Ans
- 1. Scary
 - 2. Serious
 - 3. Fatal
 - 4. Ominous

Question ID : 65497828433
Status : Answered
Chosen Option : 3

Q.18 Select the most appropriate ANTONYM of the given word.

Vital

- Ans
- 1. Critical
 - 2. Trivial
 - 3. Manual
 - 4. Crucial

Question ID : 65497828423
Status : Answered
Chosen Option : 2

Q.19 Select the most appropriate ANTONYM of the given word.

Precarious

- Ans
- 1. Safe
 - 2. Dangerous
 - 3. Uncertain
 - 4. Perilous

Question ID : 65497828426
Status : Not Answered
Chosen Option : --

Q.20 Select the most appropriate **SYNONYM** of the given word.

Threat

- Ans** 1. Suggestion
 2. Proof
 3. Attention
 4. Risk

Question ID : 65497828432

Status : Answered

Chosen Option : 4

Comprehension:

In the following passage, some words have been deleted. Read the passage carefully and select the most appropriate option to fill in each blank.

When the air is clear, the sunset (1)_____ yellow, because the light from the sun has passed a long distance through air and the blue light (2)_____ scattered away. If the air is polluted with small particles, natural (3)_____ otherwise, the sunset will be more red. Sunsets over the sea may also be orange, (4)_____ salt particles in the air. The sky (5)_____ the sun is seen reddened, as well as the light coming directly from the sun.

SubQuestion No : 21

Q.21 Select the most appropriate option to fill in blank no. 1.

- Ans** 1. is
 2. appears
 3. has appeared
 4. appeared

Question ID : 65497828435

Status : Answered

Chosen Option : 2

Comprehension:

In the following passage, some words have been deleted. Read the passage carefully and select the most appropriate option to fill in each blank.

When the air is clear, the sunset (1)_____ yellow, because the light from the sun has passed a long distance through air and the blue light (2)_____ scattered away. If the air is polluted with small particles, natural (3)_____ otherwise, the sunset will be more red. Sunsets over the sea may also be orange, (4)_____ salt particles in the air. The sky (5)_____ the sun is seen reddened, as well as the light coming directly from the sun.

SubQuestion No : 22

Q.22 Select the most appropriate option to fill in blank no. 2.

- Ans** 1. has
 2. was
 3. will be
 4. has been

Question ID : 65497828436

Status : Answered

Chosen Option : 4

Comprehension:

In the following passage, some words have been deleted. Read the passage carefully and select the most appropriate option to fill in each blank.

When the air is clear, the sunset (1)_____ yellow, because the light from the sun has passed a long distance through air and the blue light (2)_____ scattered away. If the air is polluted with small particles, natural (3)_____ otherwise, the sunset will be more red. Sunsets over the sea may also be orange, (4)_____ salt particles in the air. The sky (5)_____ the sun is seen reddened, as well as the light coming directly from the sun.

SubQuestion No : 23**Q.23 Select the most appropriate option to fill in blank no. 3.**

- Ans 1. if
 2. but
 3. or
 4. and

Question ID : 65497828437

Status : Answered

Chosen Option : 3

Comprehension:

In the following passage, some words have been deleted. Read the passage carefully and select the most appropriate option to fill in each blank.

When the air is clear, the sunset (1)_____ yellow, because the light from the sun has passed a long distance through air and the blue light (2)_____ scattered away. If the air is polluted with small particles, natural (3)_____ otherwise, the sunset will be more red. Sunsets over the sea may also be orange, (4)_____ salt particles in the air. The sky (5)_____ the sun is seen reddened, as well as the light coming directly from the sun.

SubQuestion No : 24**Q.24 Select the most appropriate option to fill in blank no. 4.**

- Ans 1. for
 2. due to
 3. because
 4. as

Question ID : 65497828438

Status : Answered

Chosen Option : 2

Comprehension:

In the following passage, some words have been deleted. Read the passage carefully and select the most appropriate option to fill in each blank.

When the air is clear, the sunset (1)_____ yellow, because the light from the sun has passed a long distance through air and the blue light (2)_____ scattered away. If the air is polluted with small particles, natural (3)_____ otherwise, the sunset will be more red. Sunsets over the sea may also be orange, (4)_____ salt particles in the air. The sky (5)_____ the sun is seen reddened, as well as the light coming directly from the sun.

SubQuestion No : 25**Q.25 Select the most appropriate option to fill in blank no. 5.**

- Ans 1. across
 2. through
 3. along
 4. around

Question ID : 65497828439

Status : Answered

Chosen Option : 3

Q.1 रिक्त स्थान भरने के लिए सबसे उपयुक्त शब्द का चयन करें।

तीनों _____ के स्वामी हैं इसलिए त्रिलोकीनाथ कहलाते हैं।

- Ans
- 1. धरती
 - 2. भवनो
 - 3. भुवनो
 - 4. आकाशो

Question ID : 65497828446
Status : Not Answered
Chosen Option : --

Q.2 इस प्रश्न में, एक शब्द चार अलग-अलग प्रकार से लिखा गया है, जिसमें से केवल एक को सही ढग से लिखा गया है। सही वर्तनी वाले शब्द का चयन करें।

- Ans
- 1. अनाधिकार
 - 2. अनाधीकार
 - 3. अनधिकार
 - 4. अनधीकार

Question ID : 65497828444
Status : Not Answered
Chosen Option : --

Q.3 दिए गए वाक्य में रेखांकित खड को प्रतिस्थापित करने के लिए सबसे उपयुक्त विकल्प का चयन करें। यदि इसे प्रतिस्थापित करने की आवश्यकता नहीं है, तो विकल्प 'किसी बदलाव की आवश्यकता नहीं है' का चयन करें।

मेरी गाय को छूने का उत्साह कभी कोई नहीं कर सकता क्योंकि वह मारती है।

- Ans
- 1. मेरी गाय को छूने की मेहनत
 - 2. मेरी गाय को छूने का हिम्मत
 - 3. किसी बदलाव की आवश्यकता नहीं है।
 - 4. मेरी गाय को छूने का साहस

Question ID : 65497828447
Status : Not Answered
Chosen Option : --

Q.4 दिए गए शब्द का विलोम चुनें।

द्रुत

- Ans
- 1. मथर
 - 2. अद्वैत
 - 3. जड़
 - 4. वेग

Question ID : 65497828448
Status : Not Answered
Chosen Option : --

Q.5 दिए गए वाक्य में रेखांकित खंड को प्रतिस्थापित करने के लिए सबसे उपयुक्त विकल्प का चयन करें। यदि इसे प्रतिस्थापित करने की आवश्यकता नहीं है, तो विकल्प 'किसी बदलाव की आवश्यकता नहीं है' का चयन करें।

पिताजी मेरे लिए कुछ कपड़े ले आये।

- Ans
- 1. मेरे को
 - 2. मुझे
 - 3. किसी बदलाव की आवश्यकता नहीं है।
 - 4. मेरे के लिए

Question ID : 65497828450
Status : Not Answered
Chosen Option : --

Q.6 दिए गए शब्द के समानार्थी शब्द का चयन करें।

कमल

- Ans
- 1. अमिय
 - 2. अमृत
 - 3. अरविन्द
 - 4. आयतन

Question ID : 65497828452
Status : Not Answered
Chosen Option : --

Q.7 मुझे मज़ा आती है। - रेखांकित शब्द की वृत्ति बताइए-

- Ans
- 1. लिंग के कारण
 - 2. वचन के कारण
 - 3. विशेषण के कारण
 - 4. कारक के कारण

Question ID : 65497828456
Status : Not Answered
Chosen Option : --

Q.8 इस प्रश्न में, एक शब्द चार अलग-अलग प्रकार से लिखा गया है, जिसमें से केवल एक को सही ढंग से लिखा गया है। सही वर्तनी वाले शब्द का चयन करें।

- Ans
- 1. मातर्हीन
 - 2. मातृहीन
 - 3. मार्तहीन
 - 4. मातृहिन

Question ID : 65497828445
Status : Not Answered
Chosen Option : --

Q.9 रिक्त स्थान को भरने के लिए सबसे उपयुक्त विकल्प का चयन करें।

मेरी _____ है कि मुझे चार दिन की छुट्टी दी जाए।

- Ans 1. प्रार्थना
 2. याचना
 3. पूजा
 4. आराधना

Question ID : 65497828459
Status : Not Answered
Chosen Option : --

Q.10 'वह बात जो जन साधारण में चलती आ रही है' इस वाक्यांश के लिए एक सार्थक शब्द दीजिए।

- Ans 1. कूपमडूक
 2. किवदती
 3. किकर्तव्य
 4. कपोल-कल्पित

Question ID : 65497828440
Status : Not Answered
Chosen Option : --

Q.11 दिए गए शब्द के समानार्थी शब्द का चयन करें।

यमुना

- Ans 1. अर्कजा
 2. तड़ाग
 3. आपगा
 4. निम्नगा

Question ID : 65497828443
Status : Not Answered
Chosen Option : --

Q.12 'सामान्य नियम के विरुद्ध बात' वाक्यांश के लिए एक शब्द होगा-

- Ans 1. विवाद
 2. सवाद
 3. वाद
 4. अपवाद

Question ID : 65497828455
Status : Not Answered
Chosen Option : --

Q.13 'आँख लगाना' मुहावरे का सही अर्थ है-

- Ans 1. गहरी नींद आना
 2. आँख में दर्द होना
 3. गले पड़ना
 4. झपकी आना

Question ID : 65497828454
Status : Not Answered
Chosen Option : --

Q.14 निम्नलिखित प्रश्न में, दिए गए चार विकल्पों में से, उस विकल्प का चयन करें, जो मुहावरे का अर्थ व्यक्त करता है।

कथा के बैंगन

- Ans
- 1. मन गढ़त बातें
 - 2. कृपण व्यक्ति
 - 3. असभव वस्तु
 - 4. केवल दूसरों के लिए उपदेश

Question ID : 65497828449

Status : Not Answered

Chosen Option : --

Q.15 'गुणदोष का समरूप मूल्यांकन करने वाले' के लिए एक शब्द लिखिए-

- Ans
- 1. शास्त्रज्ञ
 - 2. ज्योतिषी
 - 3. जिज्ञासु
 - 4. समीक्षक

Question ID : 65497828458

Status : Not Answered

Chosen Option : --

Q.16 दिए गए वाक्य में रेखांकित खंड को प्रतिस्थापित करने के लिए सबसे उपयुक्त विकल्प का चयन करें। यदि इसे प्रतिस्थापित करने की आवश्यकता नहीं है, तो विकल्प 'किसी बदलाव की आवश्यकता नहीं है' का चयन करें।

मैं आपका दर्शन करने आया हूँ।

- Ans
- 1. किसी बदलाव की आवश्यकता नहीं है।
 - 2. मैं आपकी
 - 3. मैं आपके
 - 4. मैं आपसे

Question ID : 65497828453

Status : Not Answered

Chosen Option : --

Q.17 दिए गए वाक्य का वह भाग ज्ञात करें जिसमें कोई त्रुटि है। यदि कोई त्रुटि नहीं है, तो 'कोई त्रुटि नहीं है' विकल्प को चुनें।

स्टेशन पहुँचते ही वह फोन कर दिया।

- Ans
- 1. फोन कर दिया
 - 2. कोई त्रुटि नहीं है
 - 3. स्टेशन पहुँचते ही
 - 4. वह

Question ID : 65497828442

Status : Not Answered

Chosen Option : --

Q.18 दिए गए वाक्य का वह भाग ज्ञात करें जिसमें कोई त्रुटि है। यदि कोई त्रुटि नहीं है, तो 'कोई त्रुटि नहीं है' चुनें।

प्रधानाचार्य ने (1)/ हिंदी अध्यापक (2)/ को बुलाये। (3)/ कोई त्रुटि नहीं है(4)

Ans 1. 3

2. 4

3. 2

4. 1

Question ID : 65497828451

Status : Not Answered

Chosen Option : --

Q.19 रिक्त स्थान भरने के लिए सबसे उपयुक्त शब्द का चयन करें।

_____ से गहने बनते हैं।

Ans 1. टीन

2. सोने

3. लोहे

4. सोना

Question ID : 65497828441

Status : Not Answered

Chosen Option : --

Q.20 सद्भाव - रेखांकित शब्द का सही विलोम बताइए-

Ans 1. दुर्भाव

2. गुस्सा

3. स्वभाव

4. क्षम्य

Question ID : 65497828457

Status : Not Answered

Chosen Option : --

Comprehension:

गद्यांश को पढ़कर पूछे गये प्रश्नों के उत्तर लिखिए-

एक साधु थे। भिक्षाटन से मजे से दिन गुजारते और आनंदपूर्वक भजन करते थे। एक दिन महत्वाकांक्षा सिर पर चढ़ी, झोपड़ी के चूहों से निपटने के लिए एक बिल्ली पाली। बिल्ली के लिए दूध की जरूरत पड़ी - तो गाय खरीद कर लाए। गाय को साज-सभाल के लिए महिला की आवश्यकता पड़ी। महिला से शादी कर ली। परिवार बना। सत बनकर लोक कल्याण करने का लक्ष्य कहीं से कहीं चला गया। भौतिक आकांक्षाओं का जाल-जाल इतना बढ़ गया कि परमार्थ का लक्ष्य पूरा करने के लिए कुछ भी नहीं बचता था। सारी क्षमता उसी में खत्म जाती थी। सपनों का जमघट ही शेष रह जाता है। कहने का तात्पर्य यह है कि हमें हमारे लक्ष्य की ओर ध्यान देना चाहिए।

SubQuestion No : 21

Q.21 साधु अपना निर्वाह _____ करके करता था। रिक्त स्थान की पूर्ति कीजिए।

Ans 1. भिक्षाटन करके

2. बच्चों को पढ़ाकर

3. नौकरी करके

4. खेती करके

Question ID : 65497828461

Status : Not Answered

Chosen Option : --

Comprehension:

गद्यांश को पढ़कर पूछे गये प्रश्नों के उत्तर लिखिए-

एक साधु थे। भिक्षाटन से मजे से दिन गुजारते और आनंदपूर्वक भजन करते थे। एक दिन महत्वाकांक्षा सिर पर चढ़ी, झोपड़ी के चूहों से निपटने के लिए एक बिल्ली पाली। बिल्ली के लिए दूध की जरूरत पड़ी - तो गाय खरीद कर लाए। गाय को साज-सभाल के लिए महिला की आवश्यकता पड़ी। महिला से शादी कर ली। परिवार बना। सत बनकर लोक कल्याण करने का लक्ष्य कहीं से कहीं चला गया। भौतिक आकांक्षाओं का जाल-जंजाल इतना बढ़ गया कि परमार्थ का लक्ष्य पूरा करने के लिए कुछ भी नहीं बचता था। सारी क्षमता उसी में खत्म जाती थी। सपनों का जमघट ही शेष रह जाता है। कहने का तात्पर्य यह है कि हमें हमारे लक्ष्य की ओर ध्यान देना चाहिए।

SubQuestion No : 22

Q.22 'आवश्यकता' के स्थान पर उचित शब्द लिखिए।

- Ans
- 1. अत्रलमद
 - 2. जरूरत
 - 3. परिश्रम
 - 4. अवश्य

Question ID : 65497828462

Status : Not Answered

Chosen Option : --

Comprehension:

गद्यांश को पढ़कर पूछे गये प्रश्नों के उत्तर लिखिए-

एक साधु थे। भिक्षाटन से मजे से दिन गुजारते और आनंदपूर्वक भजन करते थे। एक दिन महत्वाकांक्षा सिर पर चढ़ी, झोपड़ी के चूहों से निपटने के लिए एक बिल्ली पाली। बिल्ली के लिए दूध की जरूरत पड़ी - तो गाय खरीद कर लाए। गाय को साज-सभाल के लिए महिला की आवश्यकता पड़ी। महिला से शादी कर ली। परिवार बना। सत बनकर लोक कल्याण करने का लक्ष्य कहीं से कहीं चला गया। भौतिक आकांक्षाओं का जाल-जंजाल इतना बढ़ गया कि परमार्थ का लक्ष्य पूरा करने के लिए कुछ भी नहीं बचता था। सारी क्षमता उसी में खत्म जाती थी। सपनों का जमघट ही शेष रह जाता है। कहने का तात्पर्य यह है कि हमें हमारे लक्ष्य की ओर ध्यान देना चाहिए।

SubQuestion No : 23

Q.23 महत्वाकांक्षा रेखांकित शब्द का उचित अर्थ लिखिए।

- Ans
- 1. दयालु
 - 2. लायक न होना
 - 3. उन्नति को प्राप्त करने की इच्छा
 - 4. बलवान होना

Question ID : 65497828463

Status : Not Answered

Chosen Option : --

Comprehension:

गद्यांश को पढ़कर पूछे गये प्रश्नों के उत्तर लिखिए-

एक साधु थे। भिक्षाटन से मजे से दिन गुजारते और आनंदपूर्वक भजन करते थे। एक दिन महत्वाकांक्षा सिर पर चढ़ी, झोपड़ी के चूहों से निपटने के लिए एक बिल्ली पाली। बिल्ली के लिए दूध की जरूरत पड़ी - तो गाय खरीद कर लाए। गाय को साज-सभाल के लिए महिला की आवश्यकता पड़ी। महिला से शादी कर ली। परिवार बना। सत बनकर लोक कल्याण करने का लक्ष्य कहीं से कहीं चला गया। भौतिक आकांक्षाओं का जाल-जंजाल इतना बढ़ गया कि परमार्थ का लक्ष्य पूरा करने के लिए कुछ भी नहीं बचता था। सारी क्षमता उसी में खत्म जाती थी। सपनों का जमघट ही शेष रह जाता है। कहने का तात्पर्य यह है कि हमें हमारे लक्ष्य की ओर ध्यान देना चाहिए।

SubQuestion No : 24

Q.24 परमार्थ- रेखांकित शब्द का विलोम बताइए।

- Ans
- 1. दुष्ट
 - 2. स्वार्थ
 - 3. क्रोधी
 - 4. लालची

Question ID : 65497828464

Status : Not Answered

Chosen Option : --

Comprehension:

गद्यांश को पढ़कर पूछे गये प्रश्नों के उत्तर लिखिए-

एक साधु थे। भिक्षाटन से मजे से दिन गुजारते और आनंदपूर्वक भजन करते थे। एक दिन महत्वाकांक्षा सिर पर चढ़ी, झोपड़ी के चूहों से निपटने के लिए एक बिल्ली पाली। बिल्ली के लिए दूध की जरूरत पड़ी - तो गाय खरीद कर लाए। गाय को साज-सभाल के लिए महिला की आवश्यकता पड़ी। महिला से शादी कर ली। परिवार बना। सत बनकर लोक कल्याण करने का लक्ष्य कहीं से कहीं चला गया। भौतिक आकांक्षाओं का जाल-जंजाल इतना बढ़ गया कि परमार्थ का लक्ष्य पूरा करने के लिए कुछ भी नहीं बचता था। सारी क्षमता उसी में खत्म जाती थी। सपनों का जमघट ही शेष रह जाता है। कहने का तात्पर्य यह है कि हमें हमारे लक्ष्य की ओर ध्यान देना चाहिए।

SubQuestion No : 25

Q.25 झोपड़ी के चूहों से निपटने के लिए साधु ने क्या किया?

Ans 1. बिल्ली पाली

2. दवा डालकर चूहों को मार दिया।

3. कुत्ते को पाला

4. कुछ भी नहीं किया

Question ID : 65497828465

Status : Not Answered

Chosen Option : --